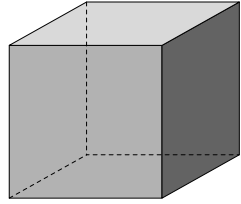


Performance Indicator: 3.G.3

Name, describe, compare, and sort three-dimensional shapes—Exercise 2

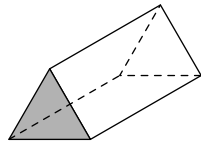
1. Look at the shape shown below.



How many faces does it have?

- A 10
- B 8
- C 6
- D 4

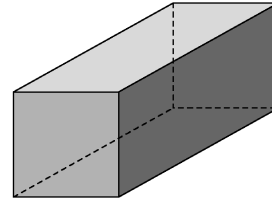
2. Look at the shape shown below.



How many edges does it have?

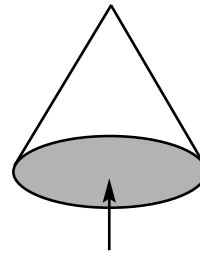
- A 5
- B 6
- C 8
- D 9

3. What is the correct name of the shape shown below?



- A cube
- B rectangle
- C rectangular prism
- D rectangular pyramid

4. Look at the cone shown below.



The arrow is pointing to which part of the cone?

- A base
- B edge
- C side
- D vertex

This page may not be reproduced.